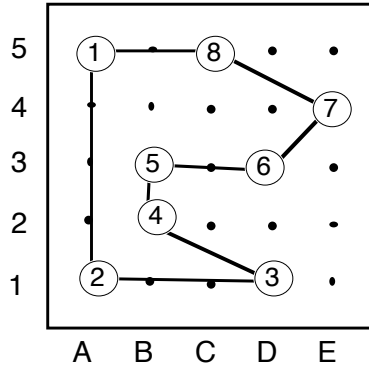
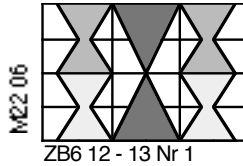


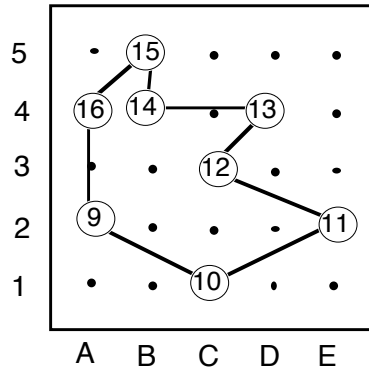
LÜK

Koordinaten 1

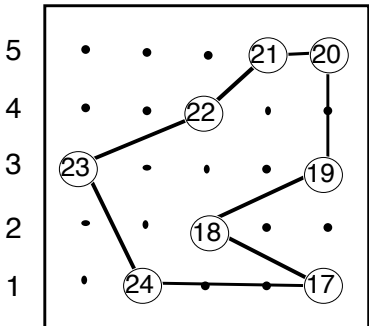


Welche Koordinaten haben die Figuren?

1. B4
2. E3
3. D5
4. B1
5. E1
6. C4



7. E4
8. D3
9. B5
10. C2
11. A1
12. C3

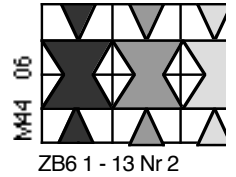


13. D4
14. A3
15. B3
16. C1
17. E5
18. A4

19. C5
20. B2
21. A2
22. D1
23. A5
24. E2

LÜK

Koordinaten 2



1. A5
2. A1
3. D1
4. B2
5. B3
6. D3
7. E4
8. C5

9. A2
10. C1
11. E2
12. C3
13. D4
14. B4
15. B5
16. A4

17. E1
18. C2
19. E3
20. E5
21. D5
22. C4
23. A3
24. B1

Wo sind die Koordinaten?

