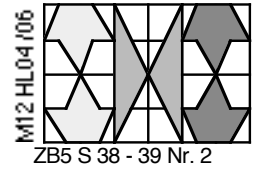
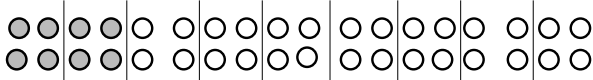


LÜK Plättchen legen 2

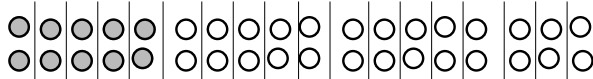


Aufgaben
Welchen Bruchteil von 36 stellt die
Zeichnung dar? Suche den Bruch.

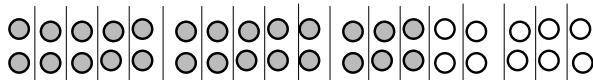
1.



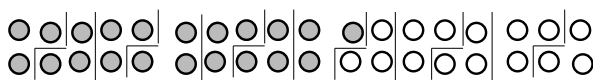
2.



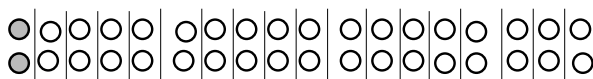
3.



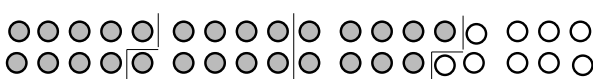
4.




5.




6.



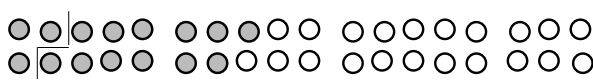
7.




8.




9.




10.




11.




12.



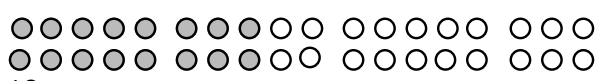
13.



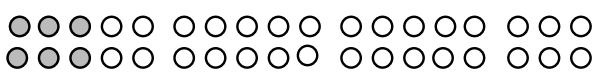
14.




15.




16.



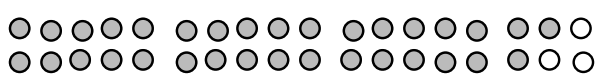
17.




18.




19.



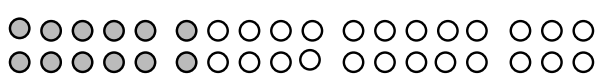
20.




21.




22.



23.



24.



Lösungen:

1. $\frac{5}{12}$ von 36 9. $\frac{3}{4}$ von 36 17. $\frac{7}{9}$ von 36

2. $\frac{13}{18}$ von 36 10. $\frac{5}{18}$ von 36 18. $\frac{11}{18}$ von 36

3. $\frac{1}{9}$ von 36 11. $\frac{17}{18}$ von 36 19. $\frac{1}{4}$ von 36

4. $\frac{2}{3}$ von 36 12. $\frac{1}{6}$ von 36 20. $\frac{1}{12}$ von 36

5. $\frac{2}{9}$ von 36 13. $\frac{1}{18}$ von 36 21. $\frac{1}{3}$ von 36

6. $\frac{7}{12}$ von 36 14. $\frac{8}{9}$ von 36 22. $\frac{5}{6}$ von 36

7. $\frac{4}{9}$ von 36 15. $\frac{11}{12}$ von 36 23. $\frac{1}{2}$ von 36

8. $\frac{7}{18}$ von 36 16. $\frac{5}{9}$ von 36 24. $\frac{1}{1}$ von 36