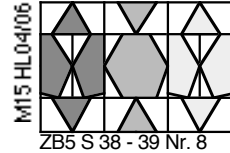

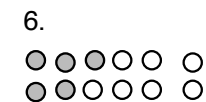

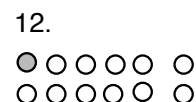



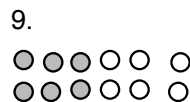

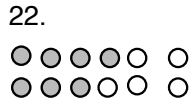

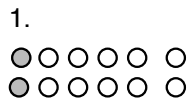


LÜK Plättchen legen 5




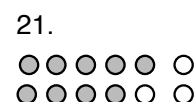




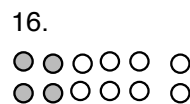
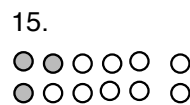
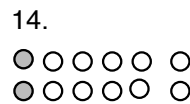
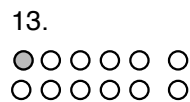


Aufgaben 1 - 12
Stelle die folgenden Bruchteile von 12 dar. Suche die Zeichnungen.

- | | | |
|-------------------------|-------------------------|----------------------------|
| 1. $\frac{1}{2}$ von 12 | 5. $\frac{3}{4}$ von 12 | 9. $\frac{1}{12}$ von 12 |
| 2. $\frac{1}{3}$ von 12 | 6. $\frac{4}{4}$ von 12 | 10. $\frac{5}{12}$ von 12 |
| 3. $\frac{2}{3}$ von 12 | 7. $\frac{1}{6}$ von 12 | 11. $\frac{7}{12}$ von 12 |
| 4. $\frac{1}{4}$ von 12 | 8. $\frac{5}{6}$ von 12 | 12. $\frac{11}{12}$ von 12 |



Aufgaben 12 - 24
Welchen Bruchteil von 12 stellt die Zeichnung dar? Suche den Bruch.



- | | | |
|--------------------------|--------------------------|----------------------------|
| 24. $\frac{1}{2}$ von 12 | 18. $\frac{3}{4}$ von 12 | 3. $\frac{1}{12}$ von 12 |
| 4. $\frac{1}{3}$ von 12 | 17. $\frac{1}{1}$ von 12 | 14. $\frac{5}{12}$ von 12 |
| 15. $\frac{2}{3}$ von 12 | 19. $\frac{1}{6}$ von 12 | 13. $\frac{7}{12}$ von 12 |
| 23. $\frac{1}{4}$ von 12 | 20. $\frac{5}{6}$ von 12 | 16. $\frac{11}{12}$ von 12 |