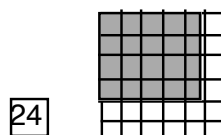
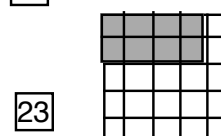
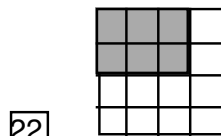
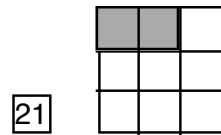
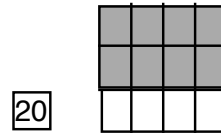
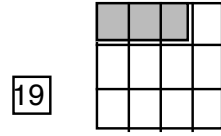
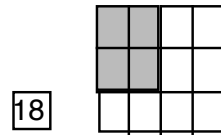
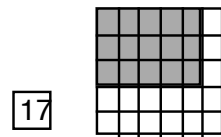
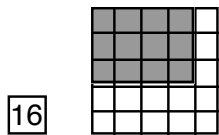
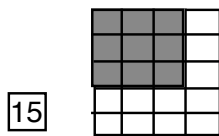
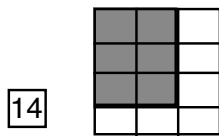
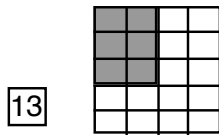
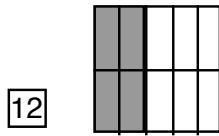
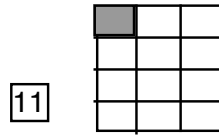
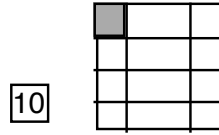
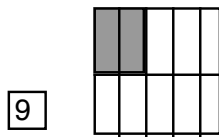
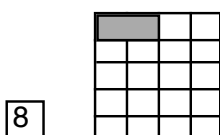
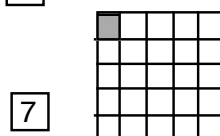
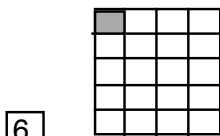
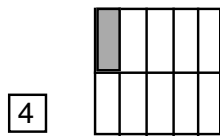
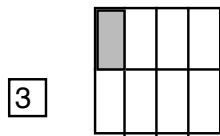
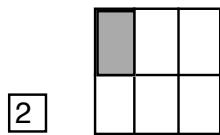
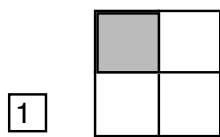
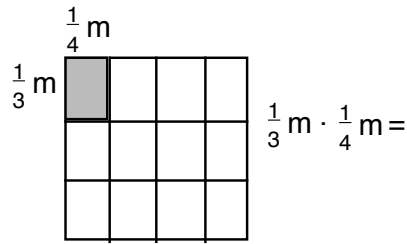


Welche Rechnungen werden mit den Modellen 1 - 24 dargestellt?

Beispiel:



1. $\frac{1}{3} m \cdot \frac{2}{3} m$

2. $\frac{4}{6} m \cdot \frac{5}{6} m$

3. $\frac{1}{5} m \cdot \frac{1}{5} m$

4. $\frac{2}{2} m \cdot \frac{2}{5} m$

5. $\frac{2}{3} m \cdot \frac{4}{4} m$

6. $\frac{2}{5} m \cdot \frac{4}{5} m$

7. $\frac{3}{5} m \cdot \frac{3}{4} m$

8. $\frac{2}{3} m \cdot \frac{2}{4} m$

9. $\frac{1}{2} m \cdot \frac{1}{3} m$

10. $\frac{1}{5} m \cdot \frac{1}{4} m$

11. $\frac{3}{5} m \cdot \frac{2}{4} m$

12. $\frac{3}{5} m \cdot \frac{4}{5} m$

13. $\frac{1}{5} m \cdot \frac{1}{3} m$

14. $\frac{1}{4} m \cdot \frac{1}{4} m$

15. $\frac{3}{5} m \cdot \frac{5}{6} m$

16. $\frac{1}{3} m \cdot \frac{3}{4} m$

17. $\frac{1}{5} m \cdot \frac{2}{4} m$

18. $\frac{1}{4} m \cdot \frac{1}{3} m$

19. $\frac{1}{2} m \cdot \frac{2}{5} m$

20. $\frac{1}{2} m \cdot \frac{1}{4} m$

21. $\frac{3}{4} m \cdot \frac{2}{3} m$

22. $\frac{2}{4} m \cdot \frac{3}{4} m$

23. $\frac{1}{2} m \cdot \frac{1}{2} m$

24. $\frac{1}{2} m \cdot \frac{1}{5} m$