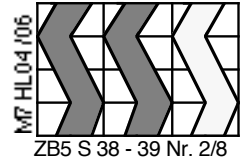


LÜK Plättchen legen 3




Aufgaben


Stelle die folgenden Bruchteile von 24 dar.
Suche die Zeichnungen.

- | | | |
|-------------------------|----------------------------|----------------------------|
| 1. $\frac{1}{2}$ von 24 | 9. $\frac{1}{8}$ von 24 | 17. $\frac{1}{24}$ von 24 |
| 2. $\frac{1}{3}$ von 24 | 10. $\frac{3}{8}$ von 24 | 18. $\frac{5}{24}$ von 24 |
| 3. $\frac{2}{3}$ von 24 | 11. $\frac{5}{8}$ von 24 | 19. $\frac{7}{24}$ von 24 |
| 4. $\frac{1}{4}$ von 24 | 12. $\frac{7}{8}$ von 24 | 20. $\frac{11}{24}$ von 24 |
| 5. $\frac{3}{4}$ von 24 | 13. $\frac{1}{12}$ von 24 | 21. $\frac{13}{24}$ von 24 |
| 6. $\frac{4}{4}$ von 24 | 14. $\frac{5}{12}$ von 24 | 22. $\frac{17}{24}$ von 24 |
| 7. $\frac{1}{6}$ von 24 | 15. $\frac{7}{12}$ von 24 | 23. $\frac{19}{24}$ von 24 |
| 8. $\frac{5}{6}$ von 24 | 16. $\frac{11}{12}$ von 24 | 24. $\frac{23}{24}$ von 24 |


1.




2.




3.




4.




5.




6.




7.




8.



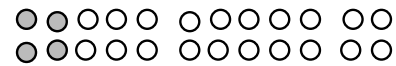
9.




10.




11.




12.




13.




14.



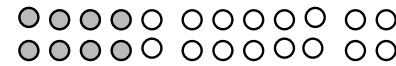
15.




16.




17.




18.




19.




20.



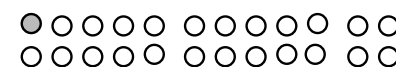
21.



22.



23.



24.

